


Autumn Count and Subtract

Name _____

Count and cross out the fall items according to the directions.
Then write down the numbers and subtract.



How many leaves are there?

6

Cross off 2 leaves.

-2

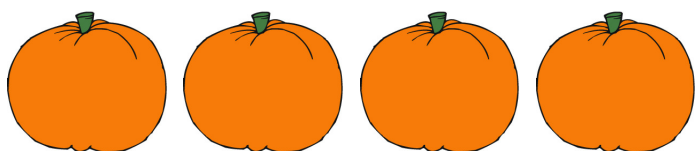
How many leaves are left?



How many scarecrows are there?

Cross off 1 scarecrow.


How many scarecrows are left?



How many pumpkins are there?

Cross off 2 pumpkins.

How many pumpkins are left?



How many corn are there?

Cross off 3 corn.

How many corn are left?