


Valentine Count and Add

Name _____


5

3



+


=



A visual equation for counting and adding. On the left, there are 5 cartoon cats arranged in two rows: three in the top row and two in the bottom row. Each cat has small red hearts floating around it. To the right of the cats is a plus sign. Further right are 3 more cartoon cats, also with red hearts, arranged in two rows: two in the top row and one in the bottom row. To the right of these cats is an equals sign. To the far right is a large, empty rectangular box for the answer.


2

4



+


=



A visual equation for counting and adding. On the left, there are 2 desktop computers, each with a red heart on its monitor. To the right is a plus sign. Further right are 4 desktop computers, each with a red heart on its monitor, arranged in two rows of two. To the right of these computers is an equals sign. To the far right is a large, empty rectangular box for the answer.


3

6



+


=



A visual equation for counting and adding. On the left, there are 3 gift boxes with red bows and hearts. To the right is a plus sign. Further right are 6 gift boxes, arranged in two rows of three. To the right of these gift boxes is an equals sign. To the far right is a large, empty rectangular box for the answer.


1

2



+

=



A visual equation for counting and adding. On the left, there is 1 birdhouse on a post with flowers. To the right is a plus sign. Further right are 2 more birdhouses on posts with flowers, arranged in a row. To the right of these birdhouses is an equals sign. To the far right is a large, empty rectangular box for the answer.